

2022 national curriculum tests

Key stage 2

Mathematics

Paper 1: arithmetic

First name						
Middle name						
Last name						
Date of birth	Day		Month		Year	
School name						
DfE number						



[BLANK PAGE]

Please do not write on this page.



1

$$6,155 + 501 + 649 =$$

1 mark

2

$$0 \times 989 =$$

1 mark

3

$$10 + \boxed{} = 302$$

1 mark



4

$2,400 \div 2 =$

1 mark

5

$\boxed{} + 70 = 485$

1 mark

6

$6.48 + 8.6 =$

1 mark



7

$$\boxed{} = 240 \div 8$$

1 mark

8

$$840 \div 5 =$$

1 mark

9


$$7,306 - 1,847 =$$

1 mark



10


$1,010 \times 10 =$



1 mark

11


$560 \div 7 =$



1 mark

12

$6 \times 10 \times 11 =$



1 mark



13

$1,080 \div 9 =$

1 mark

14

$500,000 - 5,000 =$


1 mark


15

$\boxed{} = 596 \times 7$

1 mark



16	$2.12 \div 10 =$	<input type="text"/>	<input type="checkbox"/> 1 mark
			

17	$21 \overline{)672}$	<input type="text"/>	<input type="checkbox"/> 2 marks
	<p>Show your method</p> 		



18

$$\frac{4}{9} + \frac{2}{3} =$$

1 mark

19

$$\begin{array}{r} 607 \\ \times 83 \\ \hline \end{array}$$

Show
your
method

2 marks



23

$8 - 5.123 =$



1 mark

24

$\frac{1}{8} \div 2 =$



1 mark

25

$\frac{1}{2} + \frac{1}{3} =$



1 mark



32

$$2\frac{1}{2} - \frac{2}{3} =$$

1 mark

33

$$\begin{array}{r} 4078 \\ \times \quad 67 \\ \hline \end{array}$$

Show
your
method

2 marks



34

$$10 - 2\frac{1}{4} =$$

1 mark

35

$$6 + 4 \div 2 =$$

1 mark

36

$$\frac{4}{5} \times 400 =$$

1 mark



[END OF TEST]

Please do not write on this page.



[BLANK PAGE]

Please do not write on this page.



2022 key stage 2 mathematics

Paper 1: arithmetic

Print version product code: STA/22/8417/p ISBN: 978-1-78957-265-0

Electronic PDF version product code: STA/22/8417/e ISBN: 978-1-78957-286-5

For more copies

Additional copies of this book are not available during the test window.

They can be downloaded afterwards from

<https://www.gov.uk/government/collections/national-curriculum-assessments-practice-materials>.

© Crown copyright 2022

Re-use of Crown copyright in test materials

Subject to the exceptions listed below, the test materials on this website are Crown copyright and you may re-use them (not including logos) free of charge in any format or medium in accordance with the terms of the Open Government Licence v3.0 which can be found on the National Archives website and accessed via the following link: www.nationalarchives.gov.uk/doc/open-government-licence. When you use this information under the Open Government Licence v3.0, you should include the following attribution: 'Contains material developed by the Standards and Testing Agency for 2022 national curriculum assessments and licensed under Open Government Licence v3.0' and where possible provide a link to the licence.



Exceptions – third-party copyright content in test materials

You must obtain permission from the relevant copyright owners, as listed in the '2022 key stage 2 tests copyright report', for re-use of any third-party copyright content which we have identified in the test materials, as listed below. Alternatively, you should remove the unlicensed third-party copyright content and/or replace it with appropriately licensed material.

Third-party content

These materials contain no third-party copyright content.

If you have any queries regarding these test materials, contact the national curriculum assessments helpline on 0300 303 3013 or email assessments@education.gov.uk.

