

Key stage 3 mathematics 2005
Mental mathematics Test C

First name _____

Last name _____

School _____

Total marks

Time: 5 seconds continued

6		°	<input type="text"/>
----------	--	---	----------------------

7		$\frac{3}{9}$	<input type="text"/>
----------	--	---------------	----------------------

8		$3m + m$	<input type="text"/>
----------	--	----------	----------------------

Time: 10 seconds

9	£	50p	<input type="text"/>
----------	---	-----	----------------------

10		25	28	<input type="text"/>
-----------	--	----	----	----------------------

11		10:30 am	<input type="text"/>
-----------	--	----------	----------------------

12	125, 115, 105,	<input type="text"/>
-----------	----------------------	----------------------

13		<input type="text"/>
-----------	--	----------------------

14	-1°C	5°C	-3°C	<input type="text"/>
	2°C	0°C		<input type="text"/>

15		<input type="text"/>
	people	<input type="text"/>

Practice question

		90	
--	--	----	--

Time: 5 seconds

1		<input type="text"/>
----------	--	----------------------

2		<input type="text"/>
----------	--	----------------------

3		$b = 14 + a$	<input type="text"/>
----------	--	--------------	----------------------

4		<input type="text"/>
----------	--	----------------------

5		9300	<input type="text"/>
----------	--	------	----------------------

Time: 10 seconds continued

Time: 15 seconds

16

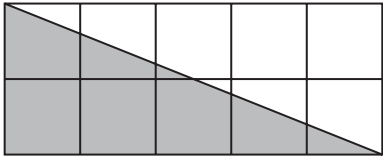
17 £ 80p

18 seconds

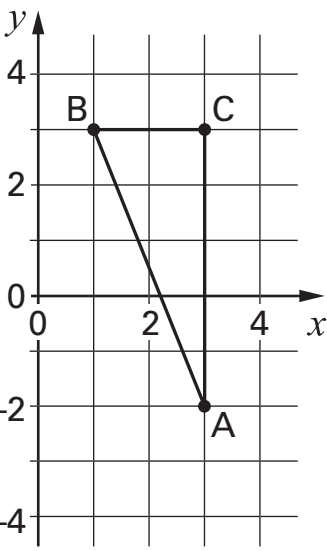
19 2000 992

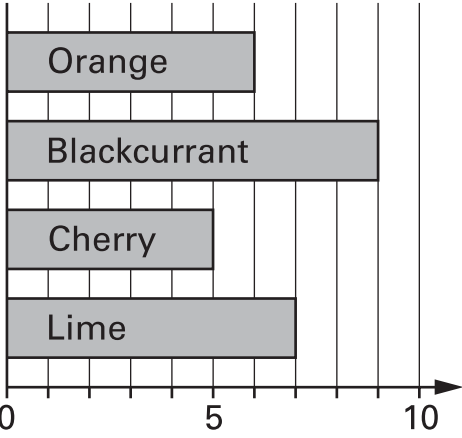
20 3, 8, 3, 1, 4

21 °C -2°C

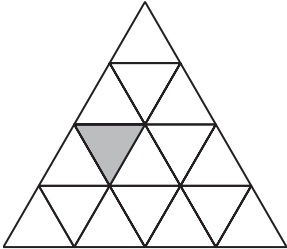
22  cm²

23 £ £60

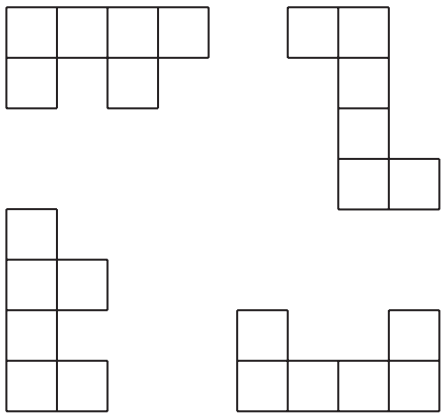
24  (,)

25 

26 W

27 

28 and

29 

30 25 cards
16 even numbers