

Key stage 3 mathematics 2007

Mental mathematics Test C

First name _____

Last name _____

School _____

Total marks

Practice question

	195	
--	-----	--

Time: 5 seconds

1	£	£17.85	<input type="text"/>
---	---	--------	----------------------

2		5 40	<input type="text"/>
---	--	------	----------------------

3	7 5 8 4 5		<input type="text"/>
---	-----------	--	----------------------

4			<input type="text"/>
---	--	--	----------------------

5	cm	70mm	<input type="text"/>
---	----	------	----------------------

6		0.1 0.2	<input type="text"/>
---	--	---------	----------------------

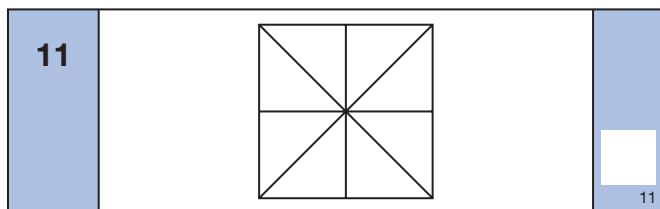
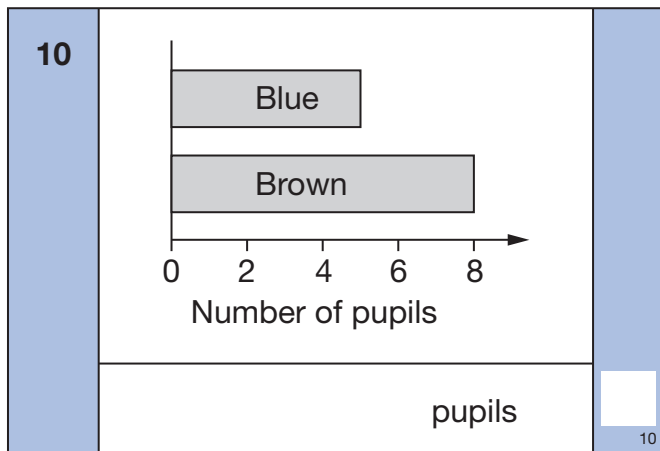
Time: 5 seconds continued

7		n	<input type="text"/>
---	--	-----	----------------------

8		$\frac{4}{5}$	<input type="text"/>
---	--	---------------	----------------------

Time: 10 seconds

9		40, 37, 34, _____, _____	<input type="text"/>
---	--	--------------------------	----------------------



12		North	<input type="text"/>
----	--	-------	----------------------



13		54 66	<input type="text"/>
----	--	-------	----------------------

14			<input type="text"/>
		cm	14

15			<input type="text"/>
----	--	--	----------------------

Time: 10 seconds continued

16

Cat	
Dog	

_____ people

16

17

_____ £7


17

18

_____ $y = x - 7$

18

19



19

20

£ _____ £1.40

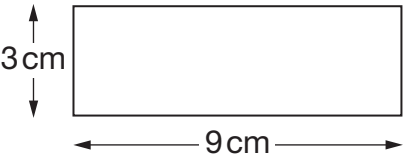
20

21

_____ °C -3°C

21

22



_____ cm²

22

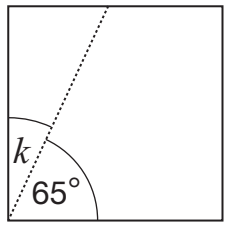
23

3 red 2 blue

23

24

_____ °



24

Time: 15 seconds

25

Notebook	£1.05
Ruler	65p
Pencil	40p

£ _____

25

26

_____ 15 24

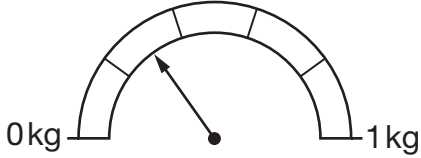
26

27

Spring	30%
Summer	22%
Autumn	28%
Winter	%

27

28



_____ kg

28

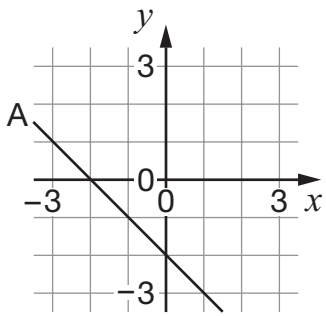
29

28 × 16 = 448

28 × 32 = _____

29

30



_____ (,)

30