

Year 7 mathematics 2005

Mental mathematics test

First name \_\_\_\_\_

Last name \_\_\_\_\_

School \_\_\_\_\_

Total marks

Practice question

		95	
--	--	----	--

Time: 5 seconds

<b>1</b>		19 13	
----------	--	-------	--

<b>2</b>		17	
----------	--	----	--

<b>3</b>			
----------	--	--	--

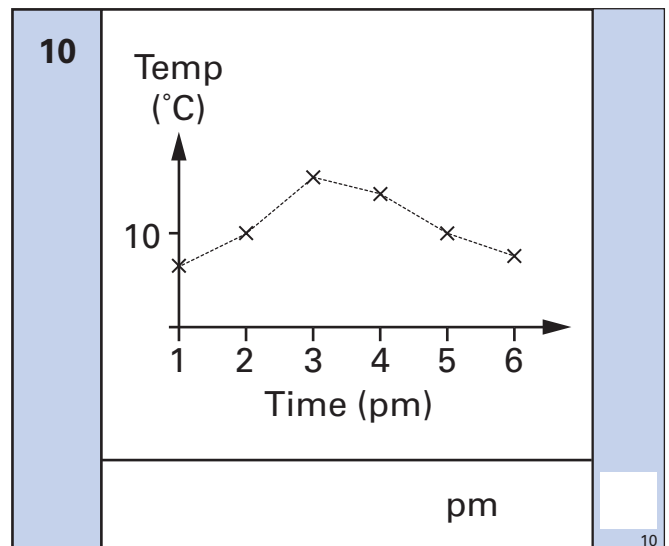
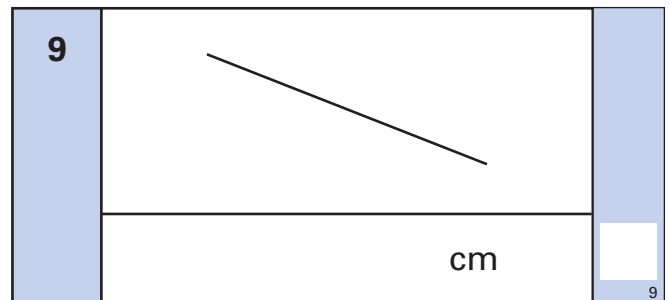
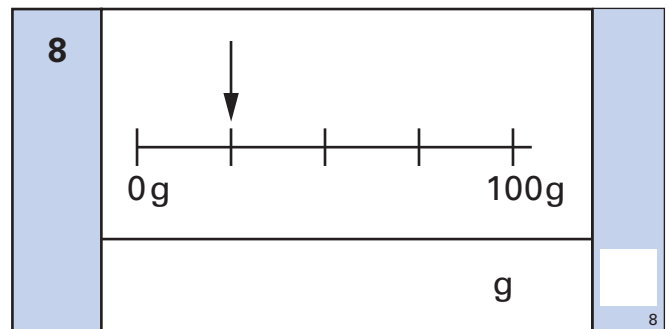
<b>4</b>		50% 60	
----------	--	--------	--

<b>5</b>		400	
----------	--	-----	--

Time: 10 seconds


<b>6</b>	April						
	Mon	4	11	18	25		
	Tue	5	12	19	26		
	Wed	6	13	20	27		
	Thu	7	14	21	28		
	Fri	1	8	15	22		29
	Sat	2	9	16	23		30
	Sun	3	10	17	24		
					<input type="text"/>		

<b>7</b>		24	
----------	--	----	--



Time: 10 seconds continued

11   $6 \times 5 - 7$

12 

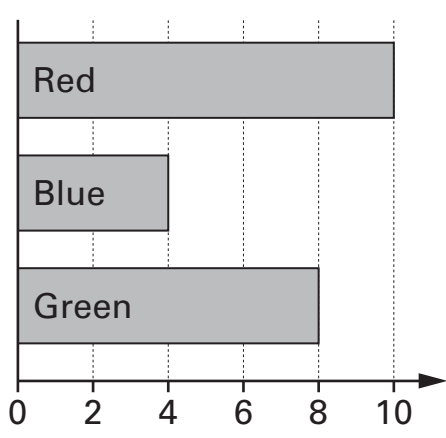
ml

13  °C  $-8^{\circ}\text{C}$

14  36

15   $4y = 44$

Time: 15 seconds

16 

pupils

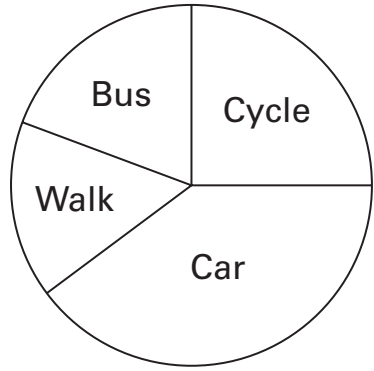
Time: 15 seconds continued

17 

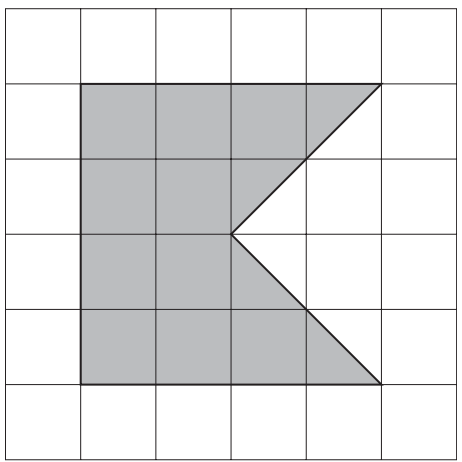
Pen	30p
Pencil	25p

£

18 33, 29, 25, 21, ..., ...

19 

%

20 

cm<sup>2</sup>